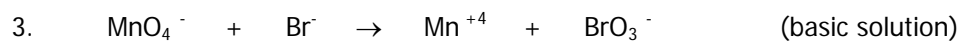
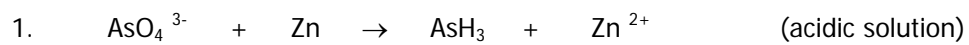
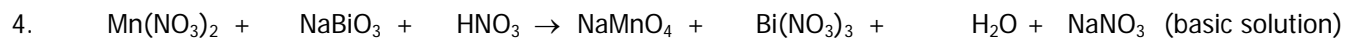


NAME _____

INSTRUCTIONS: Balance by using the **half reaction method**. Determine what is oxidized, reduced, the oxidizing agent, and the reducing agent. Show your work.





INSTRUCTIONS: Balance by using the **oxidation number method**. Determine what is oxidized, reduced, the oxidizing agent, and the reducing agent. Show your work.

